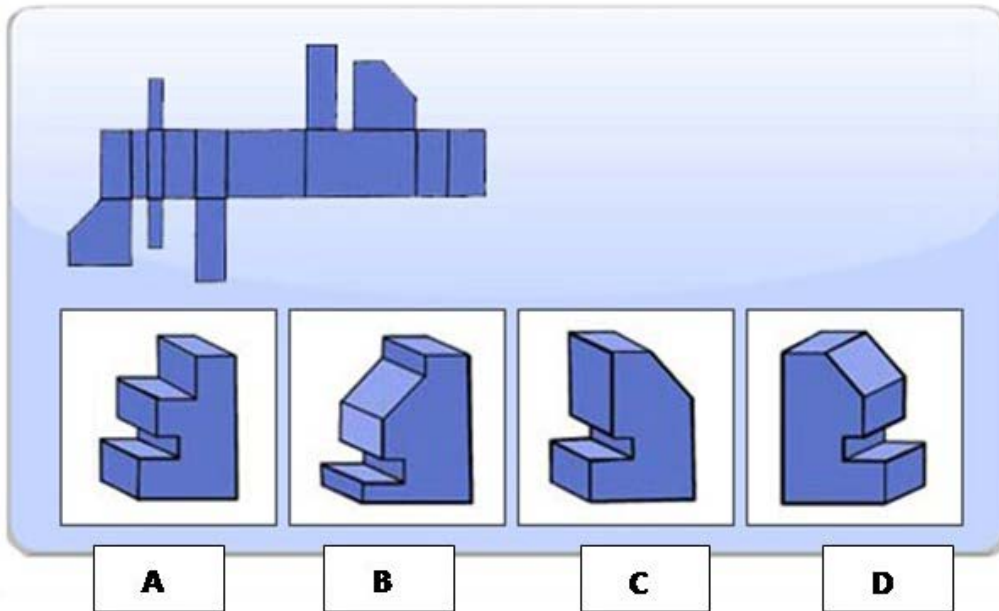


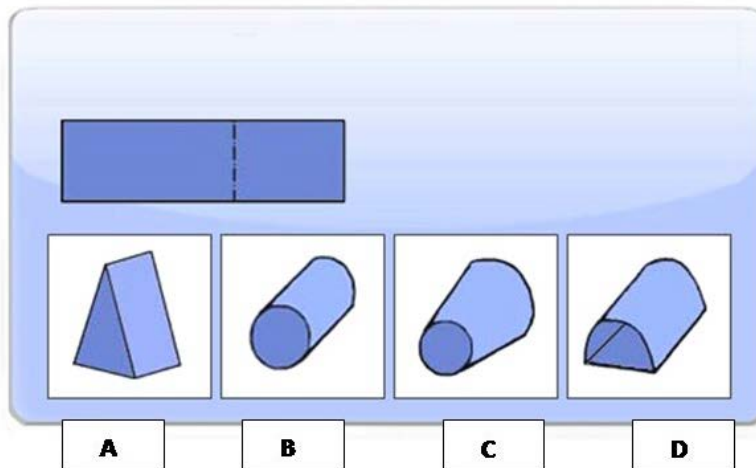
# 2022 GTB PAST QUESTIONS

1. Which is the correct representation of the first one?



- A. A
- B. B
- C. C
- D. D

2. Which is the correct representation of the first one?



- A. A
- B. B
- C. C
- D. D

Answer: B


3. Find the odd one out

7, 8, 10, 12, 17, 22

- A. 7
- B. 12
- C. 8
- D. 22
- E. 17

Answer: B

4. Change the box with the question marks?



- A. A
- B. B
- C. C

Answer: C

5. If

$A*B$  means A and B are the same age

$A+B$  mean A is younger than B

$A-B$  means B is younger than A

Then

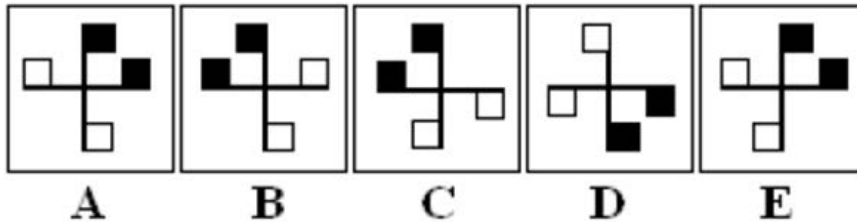
For an expression Rume-Tony-Tosin which of the following cannot be correct under any circumstances?

- A. Tosin is father of Rume
- B. Tosin is the younger brother of Rume

- C. Rume is the mother of both Tosin and Tony
- D. None of these

Answer: A

6. Which figure is the odd one out?



- A. A
- B. B
- C. C
- D. D
- E. E

Answer: A

7. If there is a 15% discount on an order for 200 chairs at N16.50 each, how much would the total order cost?

- A. 2016.50
- B. 2970
- C. 1650
- D. 1402.50
- E. 2805

Answer: E

8. There are five friends Tope, Tobi, Tunde, Tayo and Timi, Tope is shorter than Tobi but taller than Timi, Tunde is Tallest. Tayo is a little shorter than Tobi and a little taller than Tope

If they stand in the order of their heights, who will be in the middle?

- A. Tobi
- B. Timi
- C. Tope
- D. Tayo
- E. None of these

Answer: D

9. Identify whether the hand written information matches the printed version. Check each line of the printed version if you find an error select the letters.

Name:	Mr D Nuyen	Policy No:	NM5827A8355
Address:	321 Wood St Napton Warwickshire CV32 7FF	Premium:	£104:21
Telephone:	07973 221452	Excess:	£50:00
		Renewal Date:	22 Feb 2010
		Customer Since:	3 July 2002

A	Policy No: NM5827A8355	Premium: £104:21	Excess: £40:00
B	Name: Mr D Nuyen	Telephone: 07973 221452	
C	Address: 321 Wood Rd, Napton, Warwickshire, CV32 7FF		
D	Customer Since: 3 July 2002	Renewal Date: 22 Feb 2010	

- A. AD
- B. AC
- C. AB
- D. AE

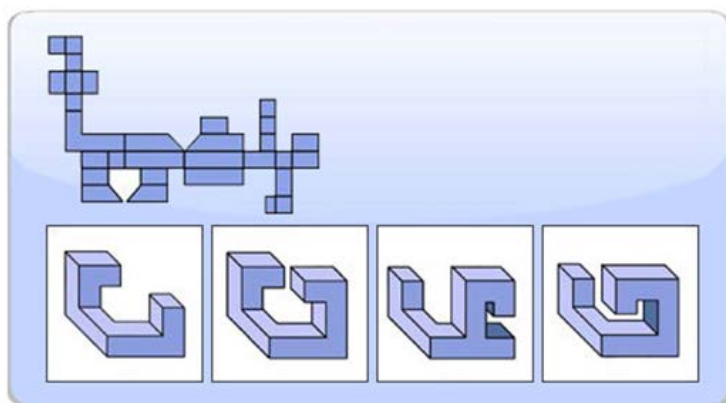
Answer: B

10. If the average weekly wage is N3,200 but a worker only earns half of this, how much does he earn?

- A. 2,300
- B. 1,600
- C. 1,500
- D. 1,560
- E. 1,570

Answer: B

11. Which is the correct representation of the first one?



- A**
- B**
- C**
- D**

- A. A
- B. B
- C. C
- D. D

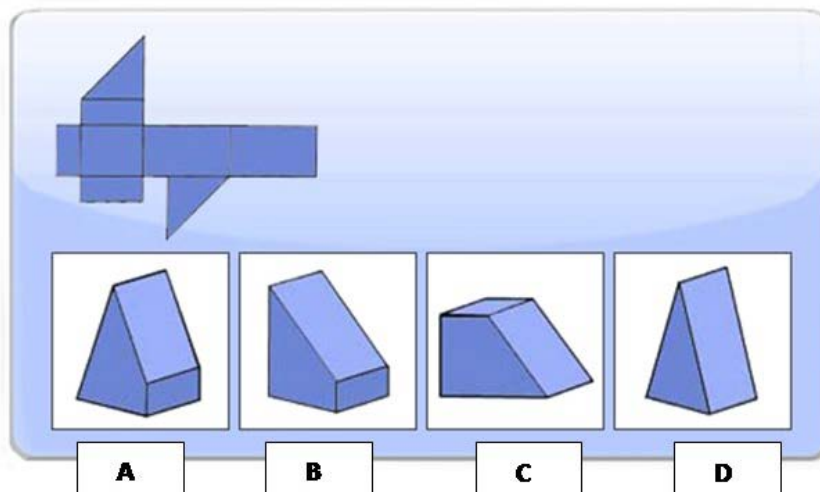
Answer: C

12. A company spends an average of N 128 per month on stationery. How much is its annual stationery bill?

- A. 1336
- B. 1563
- C. 563
- D. 1536
- E. 1530

Answer: D

13. Which is the correct representation of the first one



- A. A
- B. B
- C. C
- D. D

Answer: B

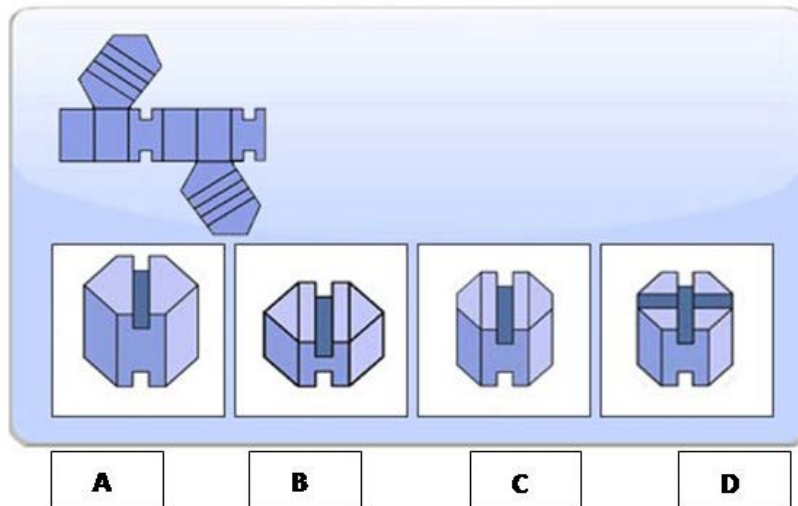
14. There were 123 pens in the office stationery cupboard but a third has been given out. How many pens remain?

- A. 80
- B. 81
- C. 82
- D. 83

E. 84

Answer: C

15. Which is the correct representation of the first one



A. A

B. B

C. C

D. D

Answer: A

16. Six friends A, B, C, D, E and F are sitting in a closed circle facing the centre; E is to the left of D; C is between A and B; and F is between E and A.

Who is to the left of B?

A. A

B. B

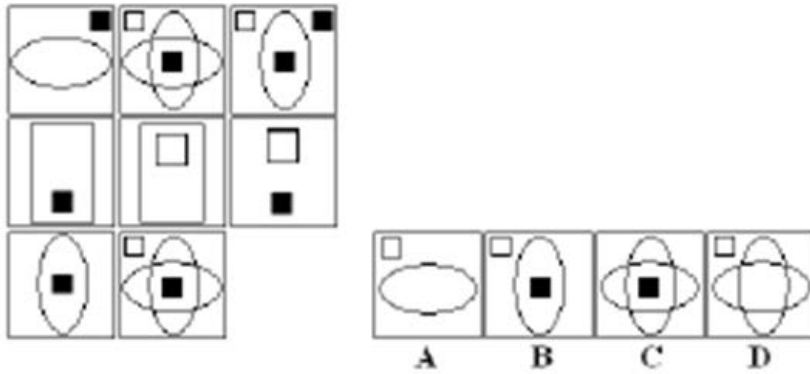
C. C

D. D

E. None of these

Answer: D

17. Which figure completes the series?



- A. A
- B. B
- C. C
- D. D


Answer: A

18. A ream of paper used to cost 4 Naira but now cost 4.20Naira. By what percentage has the price increased?

- A. 7%
- B. 12%
- C. 5%
- D. 13%
- E. 20%

Answer: C

19. Change the box with the questions mark?



- A. A
- B. B
- C. C

Answer: B

20. influenza is to virus, as \_\_\_\_\_ is to Typhoid

- A. Bascillus
- B. Parasite
- C. Protozoa
- D. Bacteria

Answer: D

