

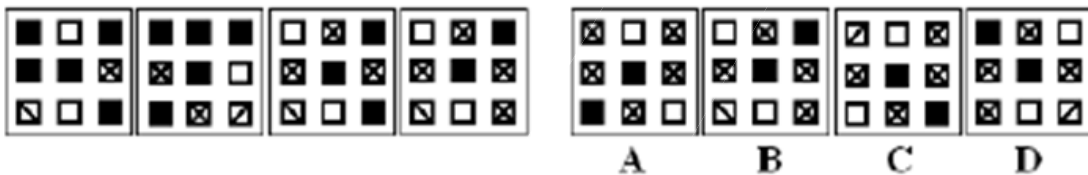
GTBANK APTITUDE TEST PAST QUESTIONS 2021 UPDATE

1. Identify the missing number within the series

86, ?, 79, 75, 72, 68

- A. 82
- B. 80
- C. 85
- D. 84
- E. 83

2. Which figure completes the series?



- A
- B
- C
- D

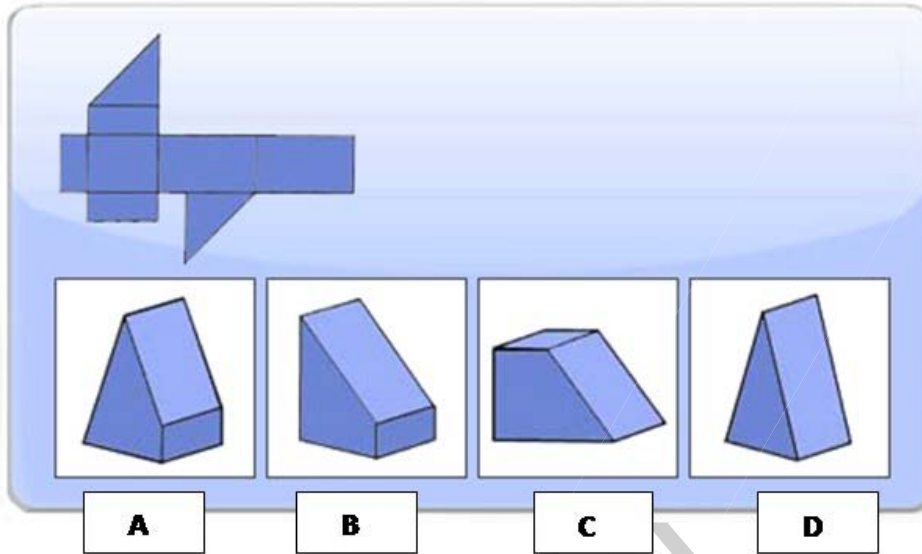
3. Six persons A,B,C,D,E and F are sitting in two rows, three in each; E is not at the end of any row; D is second to the left of F; C the neighbour of E, is sitting diagonally opposite to D; and B is the neighbour of F.

Which of the following are sitting diagonally opposite to each other?

- A. F and C
- B. D and A
- C. A and C
- D. A and F

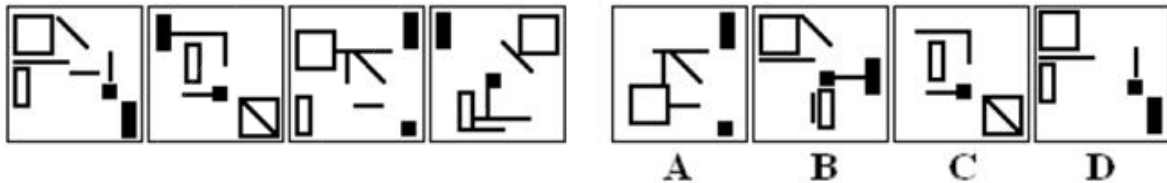
E. A and B

4. In the figures shown, one of the shapes (A-D) is identical to the first figure but has been rotated. What figure is identical to the first?



- A
- B
- C
- D

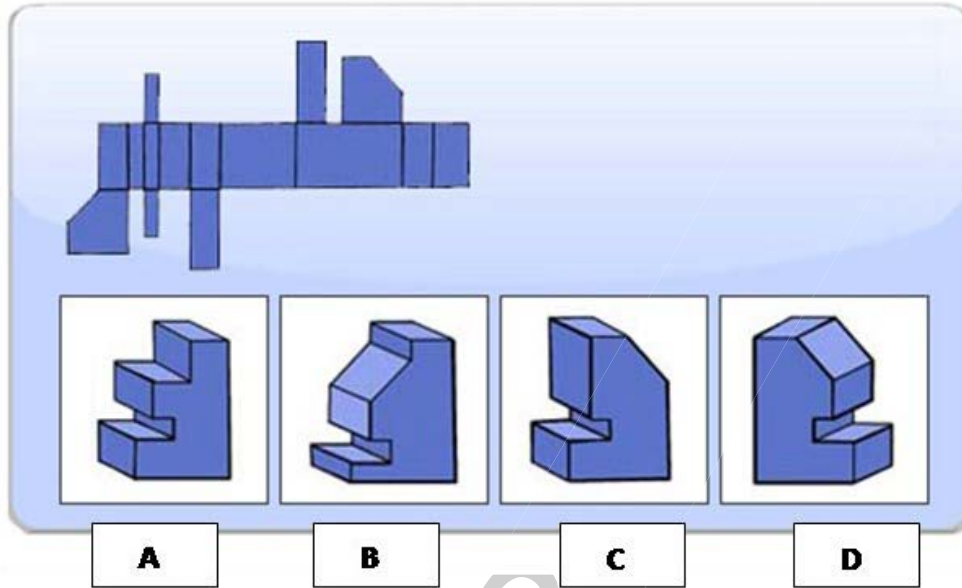
5. Which figure completes the series?



A

- B
- C
- D

6. Which is the correct representation of the first one



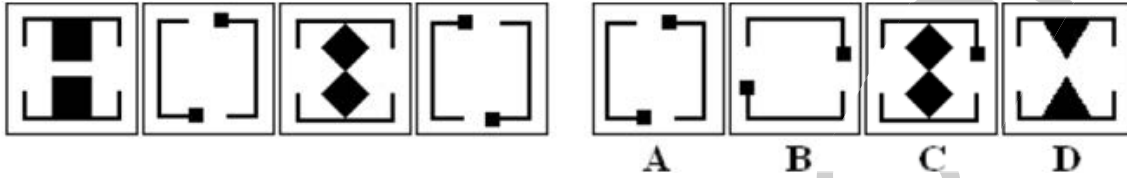
- A
- B
- C
- D

7. If a three minute phone call to Australia cost N85 , how much would a 15 minutes call cost?

- A. 3.50
- B. 3.75
- C. 4.00
- D. 4.25

E. 4.50

8. Which figure completes the series?



A

B

C

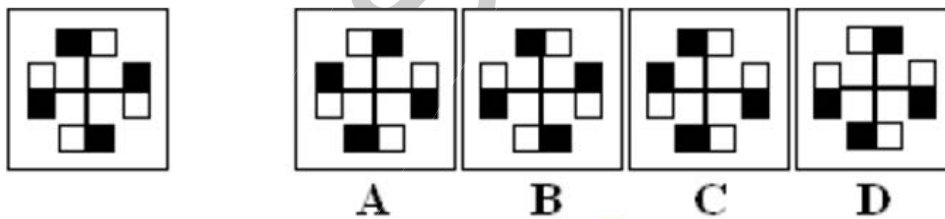
D

9. Find the missing number indicated by the question mark

6,13,?,27,34,41

- A. 21
- B. 20
- C. 19
- D. 18
- E. 34

10. Choose the figure that is related with the one given



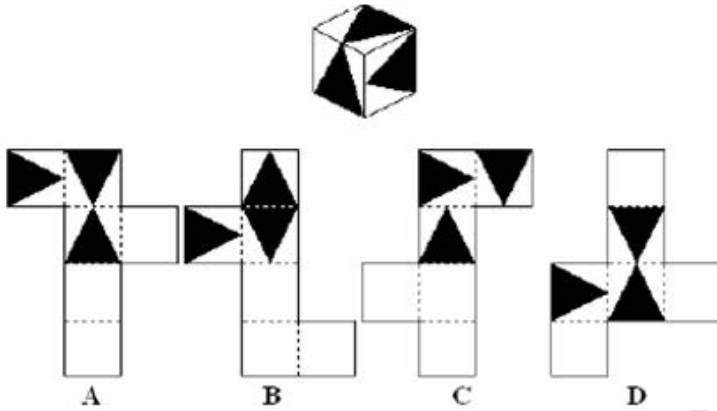
A

B

C

D

11. Which group of shapes can be assembled to make the shape shown?

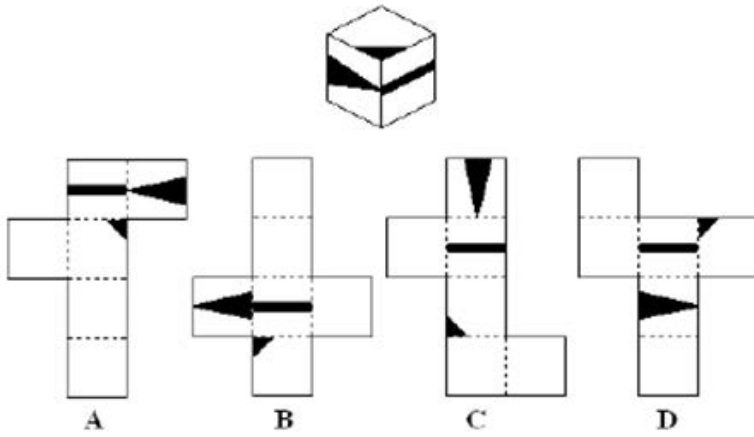


- A
- B
- C
- D

12. Twelve boxes of spare parts weigh 144 kilos. How much do three boxes weigh?

- A. 12kg
- B. 36kg
- C. 24kg
- D. 40kg
- E. 20kg

13. Which group of shapes can be assembled to make the shape shown?




- A
- B
- C
- D

14. Choose the figure that is not related with the other ones (a,b,c,d):



- A
- B
- C
- D

15. Change the box with the question marks (???)



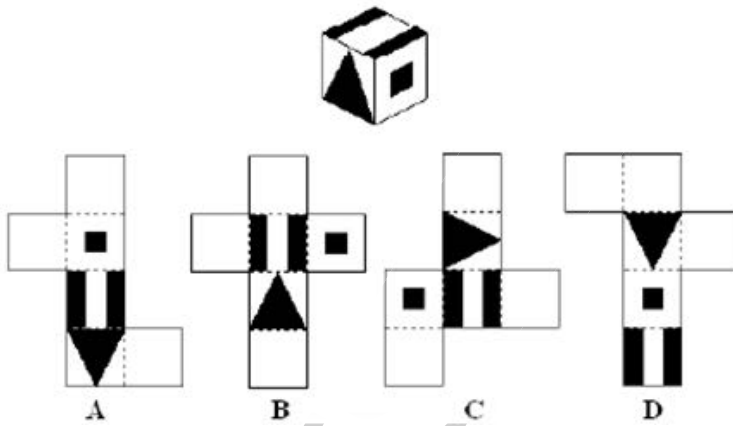
- A
- B
- C

16. Eight books are kept one over the other counting from the top the second, fifth and sixth books are on plays. Two books on plays are between two books on composition. One book of plays is between two books on poetry. While the book at the top of the book of literature is a book of Composition.

Which book is fourth from the top?

- A. Plays
- B. Poetry
- C. Composition
- D. Literature

17. Which group of shapes can be assembled to make the shape shown?



- A
- B
- C
- D

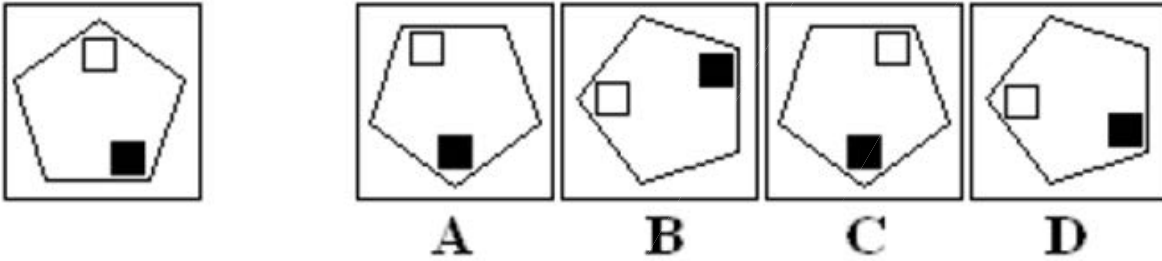
18. Find the odd one out

7, 8, 10, 12, 17, 22

- A. 7

- B. 12
- C. 8
- D. 22
- E. 17

19. Which figure completes the statement?



- A
- B
- C
- D

20. Sue has \$22.40. How many books can she buy if each book costs \$3.20?

- A. 6
- B. 7
- C. 5
- D. 8
- E. 9